

PERIODIC TEST II– 2022-2023

Name: _____

Grade: I

Subject: Maths

Date: 25-8-2022

Time: 1½ hour

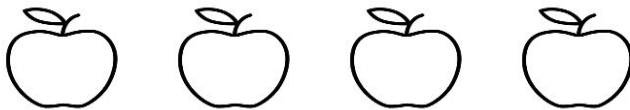
**Marks
obtained:**

Total:30


I. Count and write the number of objects.

(5X1=5)

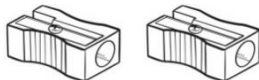
1. _____ apples



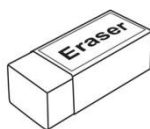
2. _____ toys




3. _____ sharpeners



4. _____ eraser



5. _____ flowers



II. Write the number name for the given numbers. (4x1=4)

S.no	Number	Number name
6 a	3	
b	9	
c	10	
d	7	

III. Write the missing numbers. (1X3=3)

7.

10	9				5				1
----	---	--	--	--	---	--	--	--	---

IV. Fill in the blanks with <, > or = (4X1=4)

8. a. 4 _____ 9

b. 6 _____ 3

c. 10 _____ 4

d. 7 _____ 7

V. Arrange the numbers from big to small . (1 X 4=4)

9.

8 9 7 10 4 2 1 5

--	--	--	--	--	--	--	--

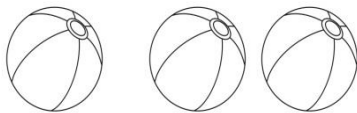
VI. Draw the number of objects for each number. (3 X 1=3)

S.no	Number	Objects
10. a	4	
b	8	
c	6	

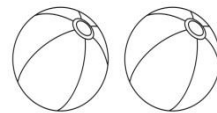
VII. Count and add .

(2 X 1=2)

11.




put together with



is _____

12.



put together with



is _____

VII. Write the numbers that come one after and one before the given numbers.

(4 X 1/2 =2)

13. 3 _____

15. _____ 7

14. 9 _____

16. _____ 2

VIII. Draw a house with two windows and one door. Around it draw four trees ,7 butterflies and colour the picture. (1X3=3)